

**Class 2<sup>nd</sup>**

**Quran**

Recite and memorize from Surah -al – Nas to Surah -al-Fil.

## **Chapter : MY senses**

### **Question / Answers**

#### **Q1.Which foods do you like to eat?**

Ans. I like to eat fruits because they are sweet in taste .

#### **Q2.What are the sounds that you hear going to school in the morning ?**

Ans. I hear birds chirping , vehicle sounds , children laughing etc while going to school in the morning

#### **Match the following :**

- |           |          |
|-----------|----------|
| 1.Nose.   | 3.See    |
| 2.Tongue. | 2.Taste  |
| 3.Eyes.   | 5. Touch |
| 4.Ears.   | 1.Smell  |
| 5.Skin.   | 4.Hear   |

#### **Activity time:**

<b>Sweet</b>	<b>Salty.</b>	<b>Sour</b>
Chocolate.	Butter	lemon
Biscuit	Biryani.	Vinegar
Apple.	Aloo paratha.	Grapes
Cake.	Sauce.	Orange

<b>Hard</b>	<b>Soft</b>	<b>Smooth</b>
Rock.	Teddy bear.	Paper
Screw.	Cotton	Brush

نارتھ لیڈ پبلک ہائی اسکول زاوہ  
سرینگر

حائب ڈیپ

کاشٹر

متوازن کہیں چین

۱۔ نو لفظ

- ① محبت - اورزو ② محبت مند - اورزو
- ③ کوچ - راتک بیت ④ متوازن - توازن دول
- ⑤ پرسیز - شود کہون

2۔ جواب و لو

س ۱۔ لغیب کہیہ سبزی تھو کہیہ پیند ؟  
ج۔ پاکہ ، زامن تہ لھول -  
س۔ عامرن کیا اوس کہیو مت ؟  
ج۔ لھول -

س۔ پرمین کیا کہیو وکاجس ؟  
ج۔ دال تہ زوٹ -

③ جواب لکھو -

س۔ پیہ سبزی تھو گر کہیوان تھو متھو منہ  
لکھو تھن تھو ناو -

ج ٹھانڑ، پاکہ تے مٹر  
سں۔۔۔ وچ ستان ریم متوازن کھین چین وڈ  
تھن پند ناو لیکھو -

ج لٹوال ، دود ، ذامت دود ، ترامن ، سبزی ،  
ماز کھکرتہ میو۔

س: کہیں کتبہ پاٹھ گزرتھ زائیں ؟

ج کہیں گز رہے تھے یا نہیں۔

س بازاری چیس، جو س تے چاکلیٹن کتا ہے  
وٹان ؟

ج بازار، چپس، جوسس تے چاکلیٹیں چہ جند  
فڈ و نان -

س 4, 5 تے 6 کیر پانسی کتابہ بیٹے -



classmate  
Date  
Page

## Index

Date :-

Day :-

Topic :- बात सुबह की (Baat Subaha ki)

Lesson No :- 9.



Q1. सुबह - सुबह चिड़िया ने क्या  
Subaha Subaha chidiya Na kya  
आवाज़ लगाई ?  
Awaz lagayee.

Ans. सुबह - सुबह चिड़िया ने चीं-चीं  
Subaha Subaha chidiya Na chi ch  
ची की आवाज़ लगाई ।  
Chi ki Awaz lagaii.

Q2. कौआ क्या बोला ?  
Kawa kya Bole.

Ans. कौआ बोला "संग तुम्हारे मैं  
Kawa Bole Sang Tumhara Main  
भी हूँ ।"  
Bi hu.

Q3. सवेरे - सवेरे पापा क्या बोले ?  
Savara Savara Papa kya Bole.

Ans. "सदा बड़ों का कहना मानो  
Sada Bodo Ka Kahna Manoo.



classmate  
Date \_\_\_\_\_  
Page \_\_\_\_\_

Q4. बड़े सवेरे मम्मी क्या बोली  
Bada Sawara Mami Kya Bole.

As. "अपने जैसा सबको जानो।"  
Apna Jaisa Sabko Janoo.

Q5. मन ने क्या आवाज़ लगाई?  
Man Na Kya Awaz Lagayee.

As. झटपट आलस छोड़ो भाई।  
Jatpat Alas Chodo Bhai.



classmate  
Date \_\_\_\_\_  
Page \_\_\_\_\_

Index.

Date :-

Day :-

Topic :- आओ पेड़ लगाएँ  
(Awoo Paad Lagayaa)

Lesson No :- 10.



Q.1 बगीचे में किस-किसके पेड़  
Bagicha Ma kis kiska Paad  
Q.2 बगीचे में नीम, आम, नारियल  
Bagicha Ma Nim Aam Nariya  
के पेड़ थे।  
Ka Paad Tha.

2. पेड़ - पौधों से हमें क्या-क्या  
Paad Poodo Sa Hama Kya Kya  
मिलता है ?  
Milta haa

पेड़ - पौधों से हमें फल, लकड़ी  
Paad Poodo Sa Hama Fael Lakka  
शुद्ध हवा मिलती है।  
Shudh Hawa Milte haa.

नीम के पेड़ के बारे में  
Neem ka Paad ka Bare Ma.  
बताओ ?  
Batao



1. नीम का पेड़ बड़ा होता है।  
Neem ka Ped Bada Hota hai.

2. नीम बहुत गुणकारी है।  
Neem Bohat Gunकारी hai.

बच्चों ने किसी मदद से  
Bocho Na Kiski Madad se

पौधे लगाने ?  
Pooda Lagaya.

माली काका की मदद से।  
Mali Kake Ki Madad se.

- Q1 What is your name ?  
Q2 Where do you live ?  
Q3 How old are you ?  
Q4 When is your birthday ?  
Q5 How many siblings you have ?  
Q6 What is your father's name ?  
Q7 What is your Mother's name ?  
Q8 How old are you ?  
Q9 What is the name of your School ?  
Q10 What is the name of your principal ?  
Q11 What is your favourite toy ?  
Q12 What is your hobby ?  
Q13 What is your favourite colour ?  
Q14 What is your favourite food ?  
Q15 What is the name of your country ?  
Q16 What is the name of your state ?  
Q17 Who is your best friend ?  
Q18 Who is your favourite teacher ?  
Q19 What is your aim ?  
What is the occupation of your father



جواب: انشاء کے والدین اسکول میں اساتذہ کے ساتھ میٹنگ کے لئے آئے تھے۔

سوال 2: استاد نے انشاء کو کتنے روپے جمع کرنے کے لیے کہا

جواب: استاد نے انشاء کو دس، پچاس، پچیس اور پندرہ روپے جمع کرنے کو کہا۔

ساتھ میٹنگ کے لئے آئے تھے۔

سوال 2: استاد نے انشاء کو کتنے روپے جمع کرنے کے لیے کہا؟

جواب: استاد نے انشاء کو دس، پچاس، پچیس اور پندرہ روپے جمع کرنے کو کہا۔

سوال 3: انشاء نے جسم کے کس حصے پر گنا شروع کیا؟

.....

سوال 3: انشاء نے جسم کے کس حصے پر گنا شروع کیا؟

جواب: انشاء نے اپنے ہاتھوں کی انگلیوں  
پر گنا شروع کیا۔



سوال 4: کیا آپ کاپی کی قیمت دیکھ کر بتا سکتے ہیں؟

جواب: جی ہاں ہم کاپی کی قیمت دیکھ کر بتا سکتے ہیں۔

سوال 5: اگر دکاندار آپ سے قیمت سے زیادہ پیسہ وصول کرتا ہے تو آپ کیا کریں گے؟

جواب: تو ہم اُسے باقی پیسے واپس کرنے کو کہیں گے۔

- ☆ میں کسی بھی عنوان پر کئی جملے لکھ سکتی ہوں۔
- ☆ انشاء نے ہاتھوں کی انگلیوں پر گنتا شروع کیا۔
- ☆ کاپی کی قیمت... پچاس روپے ہے۔

۵. نیچے دیے ہوئے لفظوں کے حروف کی تعداد اُس کے سامنے لکھیے

الفاظ	تعداد
بات	تین
کام	تین
پنسل	چار
کاپی	چار

۱. پھاٹک ایسے ہیں جو دونوں اطراف سے پڑے جاتے ہیں

لال - توت - باب - وغیرہ

آپ بھی کچھ ایسے الفاظ لکھیے جو دونوں اطراف سے پڑھے جائیں

☆ نان

☆ ساس



☆ داماد

☆ ابا













## Question: 1

Now you may find how many necklaces and loose beads the other children take.

	<i>Beads</i>	<i>Necklace of 10 beads</i>	<i>Loose beads</i>
Razia	12		
Reema	17		
Aarif	24		
Sonu	35		
Simar	31		

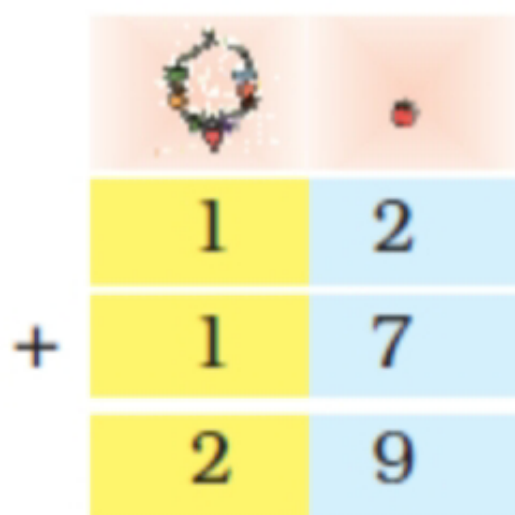
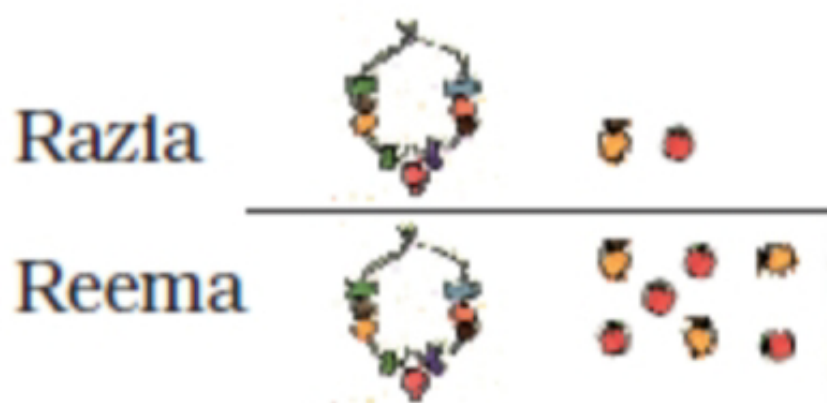
Answer:

	Beads	Necklace of 10 beads	Loose beads
Razia	12		
Reema	17		
Aarif	24		
Sonu	35		
Simar	31		

## Question: 2

How many beads are taken by Razia and Reema together?

Answer:

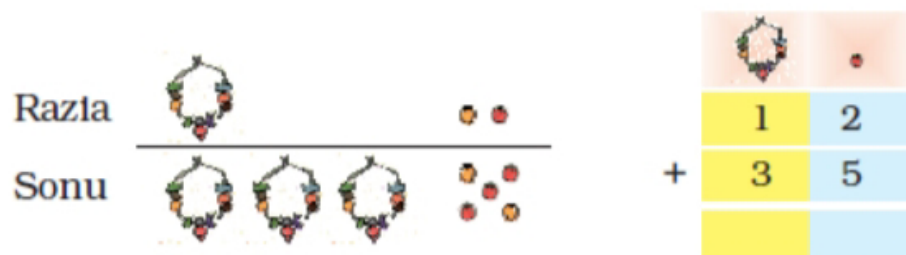


Razia and Reema have taken 29 beads together.



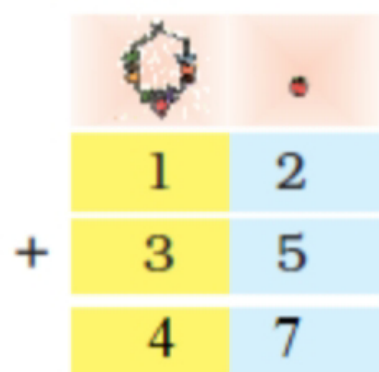
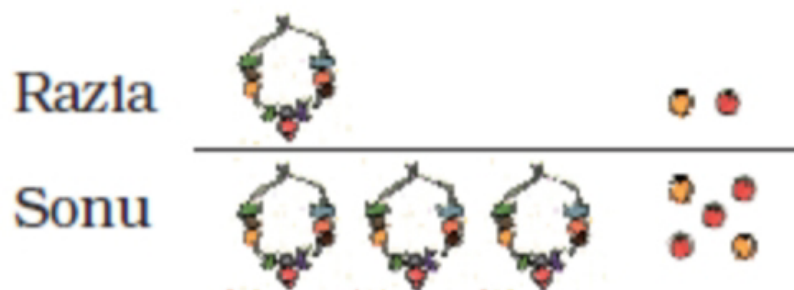
### Question: 3

How many beads are taken by Razia and Sonu?



----- beads are taken by Razia and Sonu.

Answer:



47 beads are taken by Razia and Sonu.

## Question: 4

How many beads do they have together?

A)

			
Reema		1	7
Sonu +		3	5

\_\_\_\_\_ beads

B)

			
Aarif		2	4
Razia +		1	2

\_\_\_\_\_ beads

Answer:

A)

			
Reema		1	7
Sonu +		3	5
		5	2

\_\_\_\_\_ beads

B)

			
Aarif		2	4
Razia +		1	2
		3	6

\_\_\_\_\_ beads

How Many More Beads?

## Question: 5



How many more beads do they have in the following?

A)

			
Sonu		3	5
Aarif -		2	4

Sonu has \_\_\_\_\_ more beads than Aarif.

B)

			
Aarif		2	4
Razia -		1	2

Aarif has \_\_\_\_\_ more beads than Razia.



Answer:

A)

			
Sonu		3	5
Aarif	—	2	4
		1	1

Sonu has 11 more beads than Aarif.











B)



			
Aarif		2	4
Razia	—	1	2
		1	2


Aarif has 12 more beads than Razia.

Question: 6

C) How many more beads does Simar have than Reema?

Simar	  		
Reema		    	—

		
	3	1
	1	7





**Answer:**

Simar: 3 necklaces, 1 bead

Reema: 1 necklace, 7 beads

Place Value Chart:

Tens	Ones
3	1
1	7
1	4

Simar has 14 more beads than Reema.

**Practice Time: Also, do it in your mind**

**Question: 7**

Tanisha has 17 pencils. Siya has 25 pencils.  
How many pencils are there in all?

Tanisha	+	1	7
Siya		2	5



**Answer:**

Tanisha		1	7
Siya	+	2	5
		4	2

There are 42 pencils in all.

**Question: 8**

**In Muneeza's class, there are 13 English storybooks and 22 Hindi storybooks. How many storybooks are there in all?**

	1	3
+	2	2



**Answer:**

$$\begin{array}{r} 13 \\ + 22 \\ \hline 35 \end{array}$$

There are 35 storybooks in all.

**Question: 9**

**Sakshi had 23 fruits. She ate 15 fruits. How many fruits are left?**

$$\begin{array}{r} 23 \\ - 15 \\ \hline \end{array}$$

**Answer:**

$$\begin{array}{r} 23 \\ - 15 \\ \hline 08 \end{array}$$

8 fruits are left.

**Question: 10**

**Daljeet has 35 marbles. Arvind has 25 marbles. How many marbles do they have in all?**

	3	5
+	2	5

**Answer:**

	3	5
+	2	5
	6	0

There are 60 marbles.



### Question: 11

Nisha has 32 bangles. Sukhi has 16 bangles.  
How many more bangles does Nisha have?

$$\begin{array}{r} 32 \\ - 16 \\ \hline \end{array}$$

Answer:

$$\begin{array}{r} 32 \\ - 16 \\ \hline 16 \end{array}$$

Nisha has 16 bangles.



## Question: 12

Help Venkatesha to make the bills.

	Rupees
Dosa	23
Uthappam	28
Total	

	Rupees
Idli	15
Coffee	8
Total	

	Rupees
Dahi Vada	25
Chilli Rice	18
Total	

	Rupees
Soup	27
Noodles	15
Total	



Answer:

	Rupees
Dosa	23
Uthappam	28
Total	51


	Rupees
Idli	15
Coffee	8
Total	23

	Rupees
Dahi Vada	25
Chilli Rice	18
Total	43

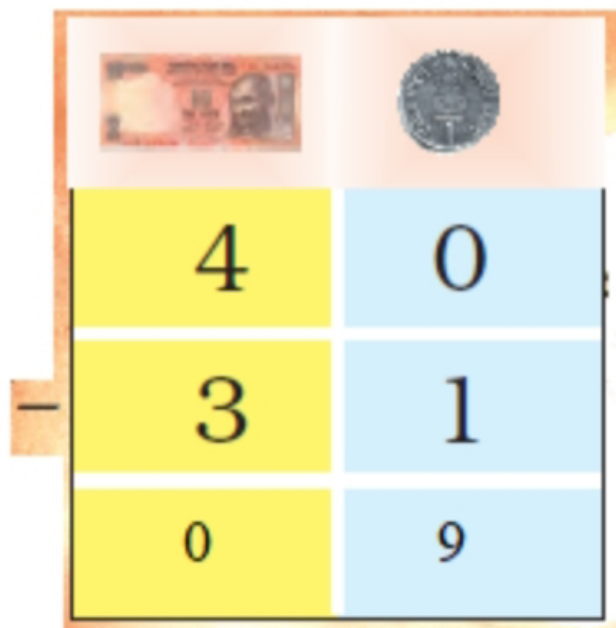
	Rupees
Soup	27
Noodles	15
Total	42



### Question: 13



Answer:



I will get back 9 rupees.



### Question: 14

Shekhar has 32 rupees. He bought a ball for 17 rupees. How much money is left with him?

		
	3	2
–	1	7

Answer:

		
	3	2
–	1	7
	1	5

15 rupees are left with Shekhar.

### Question: 15

Soni bought biscuits for 24 rupees and a packet of chips for 16 rupees. How much money will she pay?

		
	2	4
+	1	6

Answer:

		
	2	4
+	1	6
	4	0

Soni pays 40 rupees.

### Question: 16

Fantoosh had 64 rupees. He spent 39 rupees at the fair. How much money is left with him?

		
	6	4
–	3	9

Answer:

		
	6	4
–	3	9
	2	5

25 rupees are left with Fantoosh.

# Chapter 11 Lines and Lines

## Whose Line is It?



Fatima



Jasbir



Raima


Fatima keeps her stump in a standing position.

Jasbir keeps his stump in a slanting position.


Raima keeps her stump in a sleeping

## Question: 1

Match the picture of each child with the correct line.




Answer:




## Question: 2

Draw more curved lines by joining the dots.



Ekta

Answer:



Ekta



## Fun with Lines

Jigyasa has a clock. She can read the time written in numbers and also the day of the week. The numbers and letters are made with straight lines. Jigyasa made more numbers and letters with used matchsticks.



Question: 3

Is there any number or letter that you cannot make with matchsticks?

Answer:

No

## Question: 4

**What about writing letters using straight lines? Which ones are easy?**

**Answer:**

Some letters are very easy to write with matchsticks. The letters A, E, F, H, I, T, V, K, and W are easy to write with matchsticks.

## Dancing Lines

**Remya saw a traffic policeman giving directions to vehicles.**



**Does a traffic policeman sometimes make curved lines?**

**Answer:**

Yes, traffic policemen sometimes make curved lines.

**Design with Dots**

**Question: 6**

**Join the dots with curved or straight lines.**

**Make your own designs.**



**Answer:**



Class: 2nd

Subject: Computer

**Answer key of Lesson no: 6 ( Fun With Paint)**

A) Tick the correct option:

1) Drawing    2) Pencil    3) Fill with color    4) Text    5) Polygon

B) Write True or False:

1) True    2) False    3) False    4) True

C) Answer the following questions:

Q1) Ans: Brushes tool is used for Freehand drawing.

Q2) Ans: The color picker tool is used to pick a color from an existing object.

Q3) Ans: The Ribbon is the strip above the drawing area.

Q4) Ans: Step 1: Click on home tab

Step 2: Select a callout shape from shapes group.

Step 3: Click and drag the mouse in the drawing area to draw a callout.

Q5) Ans: Click on one of the colours with the left mouse button to change the background color , Click on the color with the right mouse button.

**End of the Lesson**